

Delhi International School, Rohini

HOLIDAYS HOMEWORK

(2018 -2019)

CLASS - IV



Dear parent,

Each task is carefully planned in order to make it student friendly and interesting. All the tasks are related to the topics covered in April/May in classroom by the students. This is an effort to reinforce the concepts and make learning an enjoyable experience. In case you need any clarification regarding the homework you may call at the school reception from

8:00 AM to 2:30 PM on all working days.

INSTRUCTIONS:

- 1. Submit all the holiday homework on the first day after summer vacation.**
- 2. Revise the syllabus done till May**
- 2. Revise the syllabus for the cycle test I to be held in July.**
- 3. Follow the instructions carefully which is written before every subject.**

Delhi International School, Rohini



ENGLISH

CLASS IV

HOLIADAYS HOMEWORK WORKSHEET

2018-2019

Q1. Read the story below and answer the questions.

We know that floods can wash away houses and roads, drown crops and people, and cause great suffering to people living in the plains, near river and the sea. But do you know why floods happen?

Floods usually are local, short-lived events that can happen suddenly, sometimes with little or no warning. Floods happen when rivers overflow because they cannot carry all the water running into them off the land's surface. Weeks of heavy rain can cause swollen rivers. Sometimes, a violent thunderstorm can be caused by a depression or hurricane, and the resultant downpour.



High tides cause floods, so do the fierce winds of a hurricane that heap up the surface of the sea and sends waves surging inland. Melting snow too, can combine with rain to raise the level of water in a river so, much that it floods the surrounding area, creating a shallow lake. Rivers can also flood when dams fails, and when ice jams or landslides temporarily block it. In areas where floods are common, people accept them as a natural and inevitable hardship which returns to burden them year after year.

I. Answer the following.

a) How do we know floods are extremely destructive?

b) What causes floods? (Give three reasons)

c) How do we know that floods cannot be predicted sometimes?

d) State true or false.

➤ High tides can also cause floods.

➤ The only monsoon that causes floods is overflowing of rivers.

Q2. Fill in blanks with personal pronoun that best completes each sentence.

1. _____ (I / me) believe you are a terrific ball player.
2. Please tell him that _____ (she / he) needs to eat before soccer practice.
3. The judge notified _____ (they / her) that she won the case.
4. _____ (She / I) want to travel around the world.
5. _____ (They / Them) work well together as a team.
6. Do you know if _____ (me / I) was selected as the captain?
7. _____ (I / He) can't stand it when I forget my keys in my car.
8. Do you know if _____ (he / they) will show up time?
9. Make sure _____ (he / I) knows the rules to the board game.
10. Why does _____ (she / it) not have the directions on the box?

Q3. Match the nouns with the pronouns that can come in their place.

- | | |
|-------------------------|---------|
| 1. Shreya | a) it |
| 2. Rishabh | b) it |
| 3. School | c) they |
| 4. Sarita and Rajni | d) we |
| 5. Mother, father and I | e) it |
| 6. The nest | f) she |
| 7. The elephant | g) he |

Q4. Circle the correct demonstrative pronoun in each sentence.

1. This is my favourite toy.
2. Would you like some of these?
3. That is the toy ,I would like to buy.
4. These are absolutely delicious!
5. Those years at the lake were the best times of my life.

Q5. Write a sentence with each possessive pronoun given below.

1. My-

2. Your-

3. His-

4. Its-

5. Our-

6. Their-

Q6. You are Aman/Anisha the head boy of your school. Your school is organising a painting competition for class IV and V. Draft a notice for the notice board. Giving all the necessary details in not more than 50 words.(do this in your notebook)



ग्रीष्मावकाश गृहकार्य

कक्षा -चार

गृहकार्य के लिए निर्देश:

- 1 सभी कार्य बख्खतापूर्वक एवं सुंदर लेख में करें।
- 2 सभी कार्य ए-4 शीट पर करने हैं।
- 3 दिए गए अभ्यास-पत्र ध्यान पूर्वक करने हैं।
- 4 परियोजना कार्य ए-3 शीट पर करना है।

गृहकार्य

(परियोजना कार्य -1)

अपने जन्मदिन की दाढ़त के लिए निमंत्रण पत्र बनाइए तथा दाढ़त में खनने वाले ष्यंजनों की सूची चित्र सहित बनाइए ।

(परियोजना कार्य-2)

हिन्दी के मुहावरों के अर्थ लिखकर ढाक्य बनाइए ।

निर्देश - अनुक्रमांक 1-15 परियोजना कार्य-1 करेंगे तथा अनुक्रमांक 16-31 परियोजना कार्य-2 करेंगे।

अभ्यास-पत्र-1

(क) दिए गए शब्दों से ढाक्य बनाइए—

1. अनेक -
2. राग -
3. लालची -
4. किराया -
5. प्रकाश पर्व -
6. उत्साह -

(ख) एक शब्द में उत्तर दीजिए —

1 विभिन्न रूप-रंग के लोग किसका अंग हैं ?

.....

2 ब्राह्मण कैसा व्यक्ति था?

.....

3 ब्राह्मण ने सेठ से क्या खरीदा था?

.....

4 सभी त्योहार हमें क्या संदेश देते हैं ?

.....

5 भाई-बहन का त्योहार कौन सा होता है ?

.....

6 पोंगल का त्योहार कौन से राज्य में मनाया जाता है?

.....

अभ्यास -प्रश्न -2

प्रश्न 1 सही शब्द चुनकर रिक्त स्थान भरो —

- 1 भारत की राजभाषा है। (हिंदी, संस्कृत)
- 2 को अंतराष्ट्रीय भाषा माना जाता है। (हिंदी, अंग्रेजी)
- 3 भाषा को लिखने का ढंग है। (लिपि ,अंकित)
- 4 भाषा के रूप हैं। (दो , चार)
- 5 किसी बात को अंकितों द्वारा समझाना होता है। (अक्षर , कठिन)

प्रश्न 2 पाँच अलग-अलग राज्यों के नाम लिखो तथा यह भी बताओ कि उन राज्यों

में कौन - कौनसी भाषाएँ बोली जाती हैं।

क्रमांक	राज्य का नाम	भाषाएँ
1		
2		
3		
4		
5		

प्रश्न 3 नीचे दिए गए वाक्यों में सर्वनाम शब्द रेखांकित कीजिए—

- 1 मैं आज बहुत खुश हूँ।
- 2 उस डिब्बे में क्या है?
- 3 तुम यहाँ क्या कर रहे हो?

4 इस जगह अच्छों का आना मना है।

5 जैसे को तैसा ।

6 वह कल मुझसे मिलने आया था।

प्रश्न 4 नीचे दिए गए वाक्यों में वंझा शब्द रेखांकित कीजिए—

1 विद्यार्थी कक्षा में पढ़ रहे हैं।

2 माली पौधों को पानी दे रहा है।

3 सोने के आभूषण महंगे होते हैं।

4 ताजमहल सुंदर इमारत है।

5 आम में मिठास है।

प्रश्न 4 नीचे दिए गए शब्दों के पाँच विच्छेद कीजिए—

1 कठिनाई -।

2 ऊपर -।

3 घण्टाघट -।

4 पढ़ाई -।



Name: _____

Class: IV- ____

Date: _____

Subject: Mathematics

Topic: Pattern

Find the missing items in each pattern.

1.

1 , 2 , 3 , 4 , 5 , ____ , ____

A. 7 , 8

B. 6 , 8

C. 7 , 9

D. 6 , 7

2.

1 , 3 , 5 , 7 , 9 , ____ , ____

A. 11 , 13

B. 10 , 11

C. 12 , 14

D. 10 , 15

3. 0 , 2 , 4 , 6 , 8 , ____ , ____

A. 9 , 12

B. 10 , 12

C. 10 , 11

D. 10 , 13

4. 3 , 8 , 13 , 18 , 23 , ____ , ____

A. 28 , 33

A
B. 27 , 32

C. 28 , 32

1
4D. 27 , 33

5. 3 , 13 , 23 , 33 , 43 , ____ , ____

1A. 63 , 73

6
B. 53 , 63

B
C. 54 , 73

D. 44 , 45

1
3

6. 0 , 5 , 10 , ____ , ____ , 25 , 30 , ...

,
A. 15 , 16

1
4B. 11 , 20

C. 12 , 13

C
D. 15 , 20

1
97. 100 , 98 , 96 , ____ , ____ , 90 , 88 , ...

A. 95 , 94

,
B. 97 , 98

1
8C. 94 , 92

D. 92 , 91

.

1

4

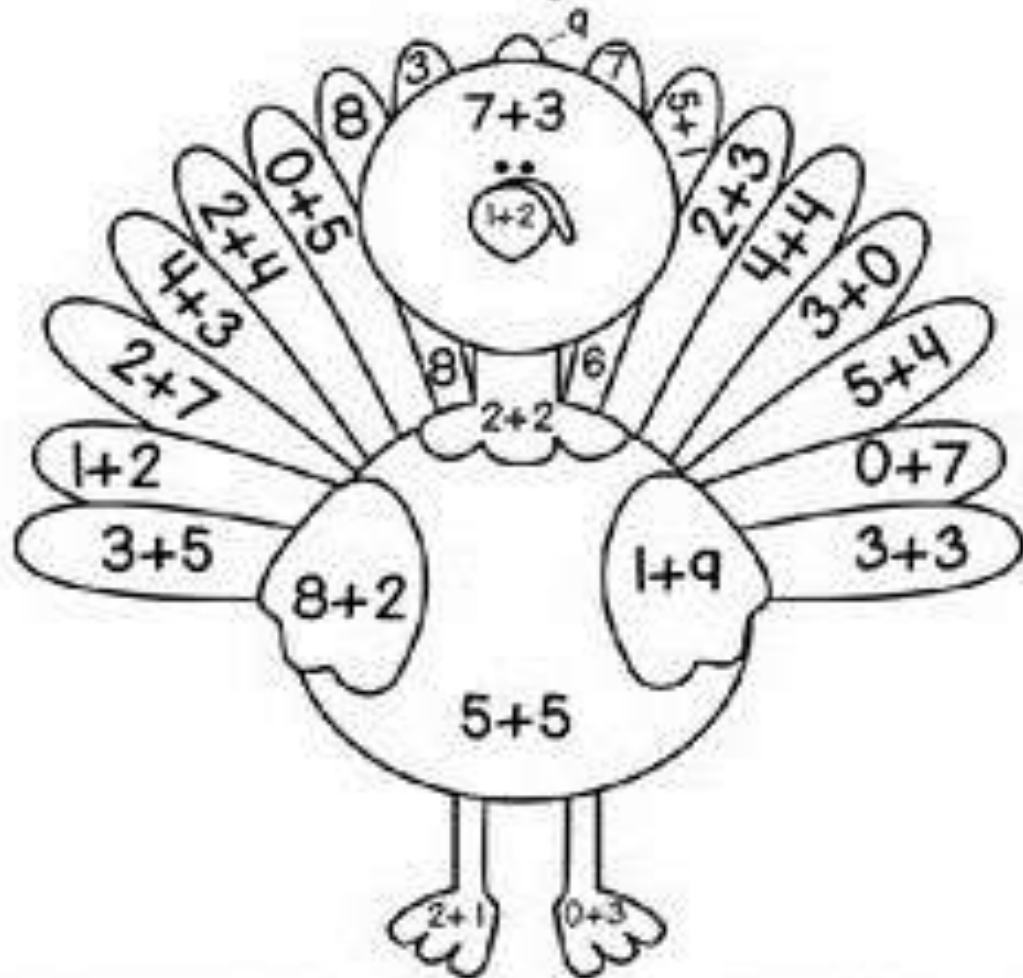
,

1

5

Lets Have some fun.....

Turkey Fun



<u>Color Key:</u>	5 - Purple	8 - Red
3 - Orange	6 - Blue	9 - Yellow
4 - White	7 - Green	10 - Brown

Ice Cream Patterns

**Color the ice cream scoops to create the patterns listed on each cone!





Name: _____

Class: IV

Date: _____

Subject: Science

HOLIDAY HOMEWORK

1.

ROAD SIGN

Label the picture with the correct word.

1. No parking
2. No entrance
3. Slippery road
4. Traffic light
5. No eating or drinking
6. Keep clean
7. Turn right
8. Be careful of children
9. No smoking
10. Don't blow the horn
11. Don't stop
12. Go straight
13. Road repairs
14. Turn left
15. No trespassing

2. Fill in the blanks.

- a) _____ bacteria convert milk into curd.
- b) A vitamin good for teeth and bones _____
- c) An important mineral that the body needs to make haemoglobin _____
- d) The nutrient group found on the top of a food pyramid _____
- e) A fungus called _____ helps to make soft cakes and bread.

3. Write True or False.

- i) Proteins give energy to the body. ()
- ii) Roughage helps in easy removal of waste from the body. ()
- iii) A balanced diet should have all the nutrients and water in it. ()
- iv) Chewing makes the food soft and moist. ()
- v) The tongue pushes the food down the wind pipe. ()

4. Higher order thinking questions:--

- i) Thumb sucking and finger sucking can cause serious dental problems. Explain?

- ii) We should not cook carrot, radish and cucumber. Why?

iii) If you keep on eating throughout the day, will your digestive system get tired? Why or why not?

iv) Why is it better to eat boiled potato rather than potato chips?

v) For how long does food remain in the small intestine in humans?

5. Write one word answer:

a) Teeth which is used to bite our food.

b) The outer cover of a tooth.

c) The soft part present inside the dentine

d) The part of tooth inside the gum

6. Have a salad party with your friends

Sprout moong dal by soaking it overnight in water and keeping it in warmth for two days.

Add chopped tomatoes, cucumber, boiled potatoes and cottage cheese. Add salt and sprinkle lemon juice on it.



Name: _____

Class: IV

Date: _____

Subject: S.St

TASK 1

Q1) CHOOSE THE CORRECT OPTION

1. The first ruler of Mughal dynasty

- a. Babur
- b. Humayun
- c. Jahangir
- d. Aurangzeb

2. After the decline of Indus valley civilization the _____ age began

- a. Modern age
- b. Vedic age
- c. Ancient period
- d. Iron age

3 Ashoka was ruler of which dynasty

- a. Mughal dynasty
- b. Chola dynasty
- c. Mauryan dynasty
- d. Gupta dynasty

4. Indo Aryans came from

- a. Central Asia
- b. Europe
- c. china

Q2) FILL IN THE BLANKS

1. Indian history is divided into _____ periods.

2. one of the most famous ruler of Magadha was _____.

3. _____ was the first Mauryan king.

4. Capital of Mauryan dynasty was at _____.

Q3) MATCH THE FOLLOWING

- | | |
|--------------------------------------|--------------------|
| 1. MEDIEVAL PERIOD IN INDIAN HISTORY | a)Asoka |
| 2. FOUNDED FATEHPUR SIKRI | b)Mughal empire |
| 3. KALING WAR | c)Akbar |
| 4. AJATASHATRU | d)Ruler of Magadha |

Q5) write T for true and F for false

1. Indo Aryans used money.
2. Jana is families with a common ancestor
3. Babur defeated Ibrahim Lodi.
4. Akbar was the founder of Mughal dynasty.

Q6) Define

- a. Capital
- b. Dynasty
- c. Empire
- d. Barter system
- e. Vedas

Q7 ANSWER THE FOLLOWING QUESTIONS.

1. Which dynasty was the first to gain control over a large part of india?
2. HOW DID THE KALINGA WAR AFFECT ASHOKA?
3. WHAT ARE VEDAS?
4. WRITE ABOUT AKBAR'S REIGN IN BRIEF?
5. WRITE THE NAMES OF ALL MUGHAL RULERS IN ORDER OF THEIR RULE.

TASK 2

Research about any famous food from the following country .Prepare a beautiful chart including the following information.

1. Name the food
2. Pictures related to food
3. Origin of the food
4. Describe the food.

Also, the child needs to present it out in class.

Roll no.(1-8) CHINA

Roll no (9-16) - INDIA

Roll no (17-24)–SPAIN

Roll no (25-32)-JAPAN



Name: _____

Class: IV

Date: _____

Subject: Computers

1. Arrange the Jumbled Words:

a)CPOMTEUR

b)PTUNI


c)ACLCUALET

d)BARNI

e)MCHANIE

f)OPRECSS

2. Arrange the IPO cycle and show the directions for the data flow.

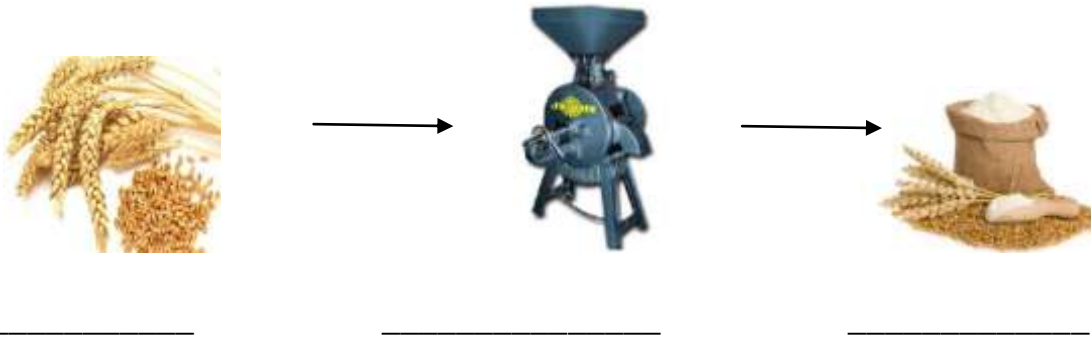


3. Draw the block diagram of computer system.



4. . Label the IPO in the following real life examples:

1)



2)



5. Sort the devices into correct category:

Headphones Web Camera Keyboard Projectors
Touch Screen Monitor Barcode Reader

INPUT DEVICES	OUTPUT DEVICES

ART AND CRAFT

HOLIDAY HOMEWORK



Pg-19,21,29,38